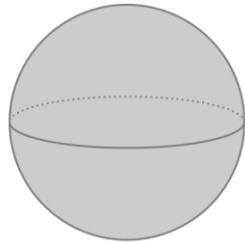


Chapter 16: Three-dimensions figures

Please circle the correct answer.

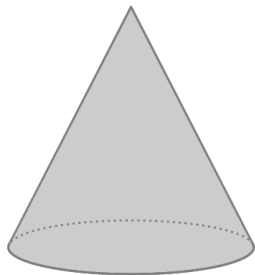
1. What shape is this ?



Sphere

Cone

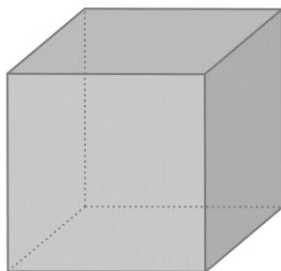
2. What shape is this ?



Sphere

Cone

3. What shape is this ?

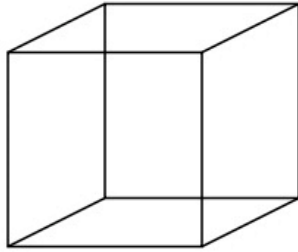


Cube

Square

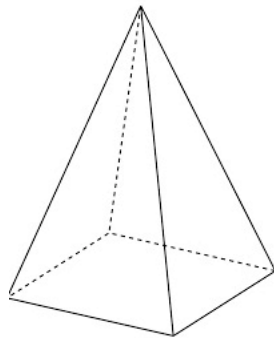
Please write down the correct answer.

1. How many faces does this shape have ?



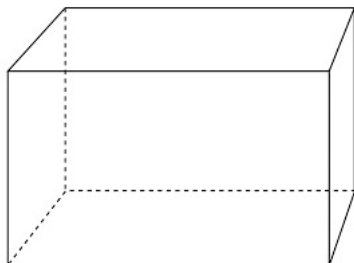
faces

-
2. How many faces does this shape have ?



faces

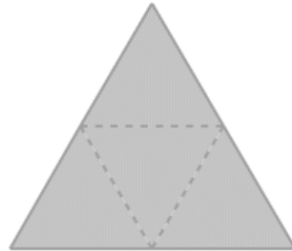
-
3. How many faces does this shape have ?



faces

Please circle the correct answer.

1. Which figure will this net make?



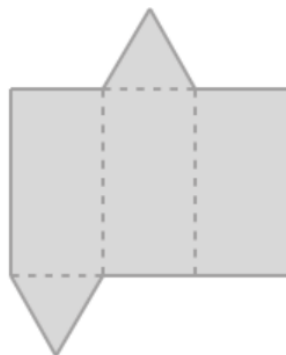
a.



b.



2. Which figure will this net make?



a.



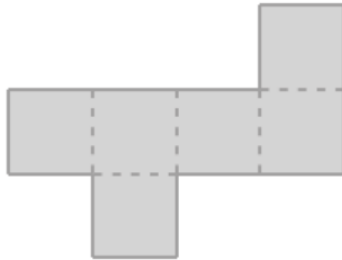
b.



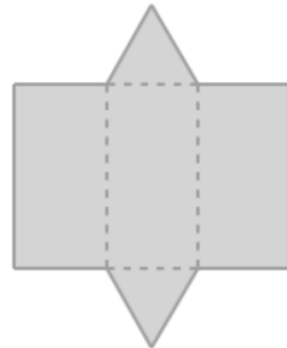
3. Which figure will this net make?



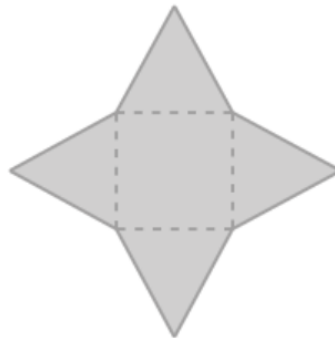
a.



b.



4. Which figure will this net make?



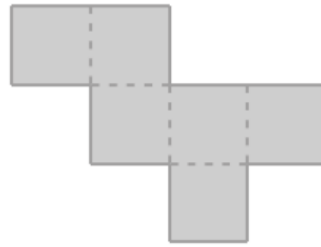
a.



b.



4. Which figure will this net make?



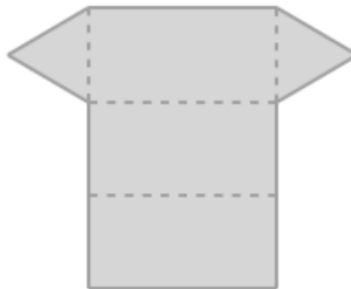
a.



b.



4. Which figure will this net make?



a.



b.

