
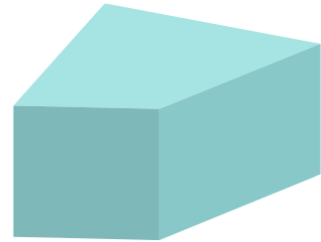

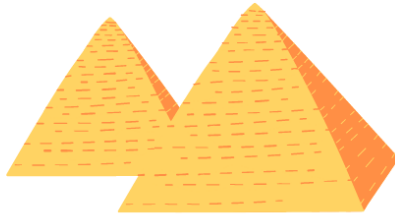


## Chapter 18: Three-Dimensional Shapes

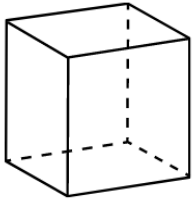
Circle all the 3D shapes below.



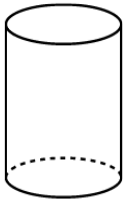
Box all the 2D shapes and circle all the 3D shapes below.



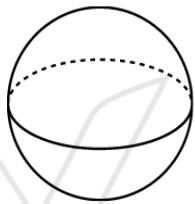
Match the shapes to their correct name:



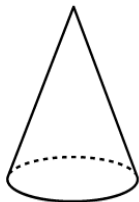
Cone



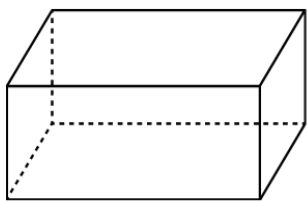
Sphere



Cube



Cylinder



Rectangular  
prism

Match the shapes to their correct name:



Cylinder



Cone



Cube



Triangular  
prism



Sphere

BEST