



Chapter 12: Multiplication (1,2,3)

Write your answer in the blanks provided.


 $2 \times 2 = \underline{\quad}$  $3 \times 2 = \underline{\quad}$  $4 \times 2 = \underline{\quad}$  $5 \times 2 = \underline{\quad}$  $6 \times 2 = \underline{\quad}$




$$1 \times 3 = \underline{\quad}$$



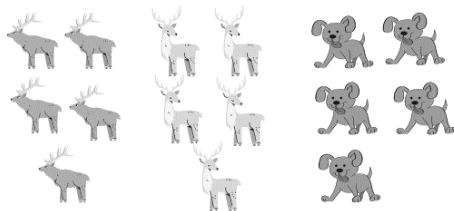
$$2 \times 3 = \underline{\quad}$$



$$3 \times 3 = \underline{\quad}$$



$$4 \times 3 = \underline{\quad}$$



$$5 \times 3 = \underline{\quad}$$

MULTIPLICATION FACTS - 1x

Find each product.

$1 \times 1 =$

$3 \times 1 =$

$1 \times 11 =$

$1 \times 8 =$

$1 \times 2 =$

$5 \times 1 =$

$1 \times 3 =$

$0 \times 1 =$

$9 \times 1 =$

$8 \times 1 =$

$7 \times 1 =$

$1 \times 10 =$

$1 \times 9 =$

$11 \times 1 =$

$1 \times 6 =$

$1 \times 5 =$

$4 \times 1 =$

$12 \times 1 =$

MULTIPLICATION FACTS - 2x

Find each product.

$1 \times 2 =$

$3 \times 2 =$

$2 \times 12 =$

$2 \times 2 =$

$12 \times 2 =$

$2 \times 7 =$

$5 \times 2 =$

$0 \times 2 =$

$6 \times 2 =$

$4 \times 2 =$

$12 \times 2 =$

$2 \times 10 =$

$2 \times 6 =$

$11 \times 2 =$

$2 \times 5 =$

$9 \times 2 =$

$2 \times 4 =$

$6 \times 2 =$

MULTIPLICATION FACTS - 3x

Find each product.

$3 \times 1 =$

$3 \times 12 =$

$3 \times 11 =$

$3 \times 8 =$

$3 \times 2 =$

$3 \times 7 =$

$3 \times 3 =$

$0 \times 3 =$

$9 \times 3 =$

$3 \times 6 =$

$8 \times 3 =$

$3 \times 10 =$

$3 \times 9 =$

$11 \times 3 =$

$5 \times 3 =$

$3 \times 3 =$

$4 \times 3 =$

$3 \times 8 =$

Solve the multiplication equations and write the correct answers in the bubbles.

2×3

7×2

3×5

8×1

3×8

9×2

9×1

11×2

5×3

3×9

3×7

2×6

Colour the multiplication sum with its matching answer. Use different colour for each sum.

0 x 11 10 3 x 1 8 3 x 9 9 x 2

3 x 11 18 3 8 3 x 8 27

12 x 2 20 9 x 3 25 5 x 2

4 x 2 6 x 3 24 27 33

12 x 2 2 x 1 5 x 5 36

12 x 3 2 8 x 1 0

10 x 2 18 10 24 24