

Chapter 1: Skip Counting by 2,3,5

i. Skip counting by 2. Fill in the blanks.


2 LESS		2 MORE		2 LESS		2 MORE
3	5	7	⋮		17	
	20		⋮		45	
	35		⋮		24	
	10		⋮		25	
	36		⋮		37	
	45		⋮		28	
	37		⋮		48	

ii. Skip counting by 3. Fill in the blanks.


3 LESS		3 MORE		3 LESS		3 MORE
3	6	7	⋮		17	
	20		⋮		12	
	30		⋮		24	
	15		⋮		21	
	36		⋮		18	
	45		⋮		27	
	37		⋮		42	

The snakes are missing some numbers! Fill in the blanks with the correct answer.


i. Skip counting by 2:



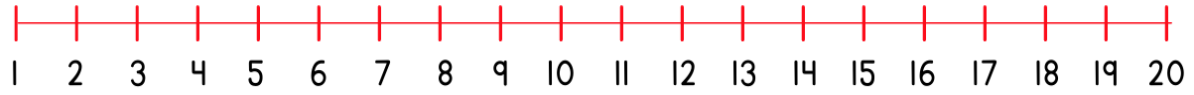
ii. Skip counting by 3:



iii. Skip counting by 5:



Write the missing numbers in the blanks provided.



8	10	12		10	_____	20
---	----	----	--	----	-------	----

2	_____	6		15	_____	19
---	-------	---	--	----	-------	----

3	6	_____		16	_____	20
---	---	-------	--	----	-------	----

4	_____	10		1	_____	5
---	-------	----	--	---	-------	---

11	_____	15		12	15	_____
----	-------	----	--	----	----	-------

5	10	_____		6	8	_____
---	----	-------	--	---	---	-------