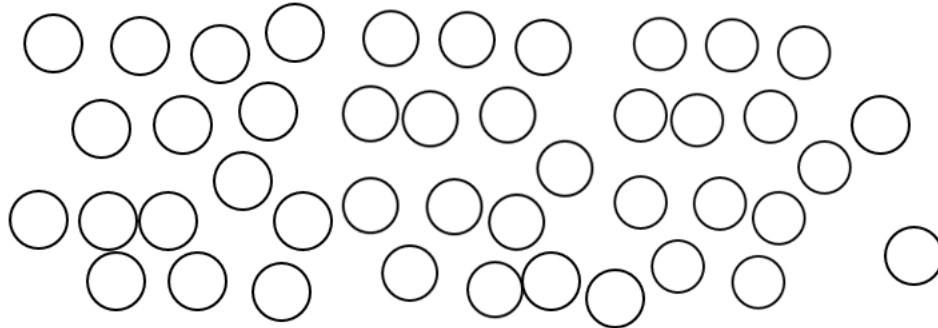


Chapter 6: Estimation & Rounding

- i. Estimate the number of balls by circle the answer.



40

100


- ii. Estimate the number of stars by circle the answer.



20

60

- iii. Estimate the number of hearts by circle the answer.




70


160

iv. Round each number to the nearest ten.

176



58



202



355




709




355



641



904



52



474



332




819




848




306



427




77



v. Round each number to the nearest hundred.


277




580




367




404




899




710




543




832




96




306



116




786




807



238



328



483

