

Chapter 17: Time

i. Write the time below each clock.



- ii. Read the time under the clock and draw the hands of the clock.



1:05 pm



4:30 pm



7:55 am



9:33 am



2:57 am



11:10 pm

VBEST

iii. Match the clock with the correct time.



It's half past six



It's two o'clock



It's twelve o'clock



It's half past seven



It's eight o'clock


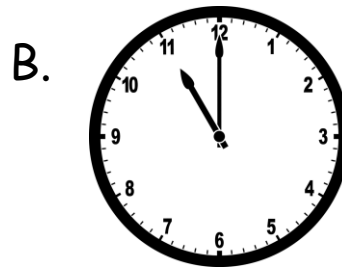



It's half past two

BEST

iv. Choose the correct answer.

1. Tom started reading his new book at 10:00 am. It was so interesting that he couldn't put it down. He read the entire book in 2 hours. What time was it when Tom finished reading?



2. It was 4:00 pm when Ali began mowing the lawn, and he finished 2 hours later. What time was it when Abe finished mowing the lawn?

A.

B.

C.

D.

3. Mitch and his friends had a movie marathon. They started watching movies at 12:00pm. The movie marathon ended at 7:00pm. How long did the movie marathon last?
- A. 3 hours
 - B. 6 hours
 - C. 7 hours
 - D. 4 hours
4. Amy and Zachary went for a bike ride through a park. They started their ride near the pond at 2:00pm. They finished near the basketball court at 4.30pm. How long did Amy and Zachary ride their bikes?
- A. 2 hours 30 minutes
 - B. 3 hours
 - C. 1 hours 30 minutes
 - D. 4 hours 30 minutes
5. How many hours are in a day?
- A. 24 hours
 - B. 12 hours
 - C. 23 hours
 - D. 20 hours
6. How many minutes are in an hour?
- A. 32 minutes
 - B. 60 minutes
 - C. 57 minutes
 - D. 24 minutes

7. How many days are in a year?

- A. 345 days
- B. 365 days
- C. 300 days
- D. 355 days

8. How many days does January have?

- A. 28 days
- B. 29 days
- C. 30 days
- D. 31 days

