



Chapter 1: Skip Counting by 2, 3, 5, 10

i. Skip Counting by 2.




2

8




14

ii. Skip Counting by 5.




10





30


iii. Skip Counting by 3.





3















iv. Skip Counting by 10.





10













60





v. Type the missing numbers in the sequence.

A) 5, _____, 15, _____, _____, _____, _____, 40

B) _____, 14, 16, _____, _____, _____, 24, _____

C) _____, 30, _____, 50, 60, _____, _____, _____

D) 56, _____, _____, _____, _____, 66, 68

vi. Choose the correct answer.

1. When counting by tens, what comes after 110?

A. 120

B. 100

C. 105

D. 95

2. When counting by twos, what comes before 14?

A. 12

B. 16

C. 18

D. 20

3. When counting by threes, what comes after 33?

A. 40

B. 36

C. 35

D. 32

4. When counting by fives, what comes before 60?

A. 59

B. 63

C. 55

D. 65

5. Lisa begins at 20. She skip-counted by tens. Can she get the number 150?
A. Yes B. No
6. Ivy begins at 3. She skip-counted by three until he gets 45. Which of these numbers could she have been counting by?
A. 19 B. 23 C. 48 D. 12
7. Kelly skip-counted, beginning at 5, until she reached 30. Could she be counting by fives?
A. Yes B. No

